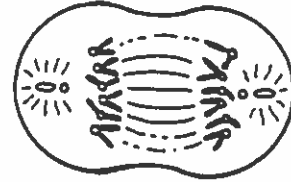
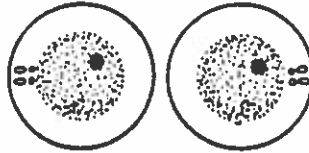
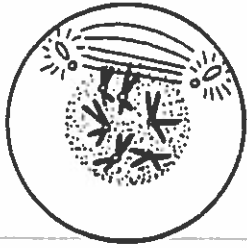
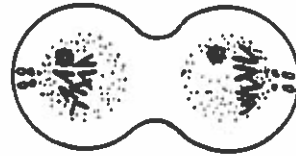
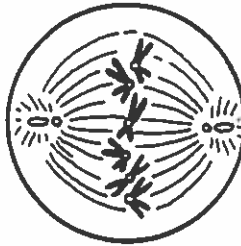
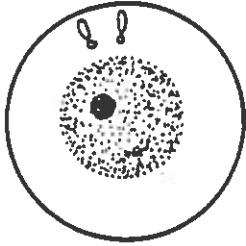


STAGES OF MITOSIS

Name _____

Number the following six diagrams of the stages of mitosis in animal cells in the proper order. Label each stage with the proper name.





Do the same for the following diagrams of mitosis in plant cells.

